






MORE OR LESS

HUNGRY ALLIGATOR



atozprintable.com








MORE OR LESS?

HUNGRY ALLIGATOR

The hungry alligator is ready for some snacks! Draw some snacks in the boxes to help the alligator see which one has more and less. Remember, the alligator always eats the greatest number of snacks!



GREATER THAN & LESS THAN



Place the greater than (>), less than (<), or equal (=) symbol in the squares provided.

$5 \square 7$

$9 \square 3$

$3 \square 4$

$4 \square 8$

$8 \square 2$

$5 \square 3$

$1 \square 0$

$12 \square 15$

$6 \square 9$

$10 \square 11$


$16 \square 13$



Name _____



Greater than & Less than



Put the greater than or less than symbol in the circle to make the number sentence true.

$3 \bigcirc 5$

$7 \bigcirc 8$

$1 \bigcirc 9$

$2 \bigcirc 1$

$4 \bigcirc 6$

$7 \bigcirc 8$

$5 \bigcirc 6$

$3 \bigcirc 7$

$2 \bigcirc 3$

$4 \bigcirc 2$

$5 \bigcirc 1$

$9 \bigcirc 2$

$5 \bigcirc 3$

$2 \bigcirc 4$

$6 \bigcirc 3$