

Free Printable Math Worksheet More or Less Practice



Increase - Decrease

Name :

- Write one less.

| | | |
|---|---|----|
| 7 | ← | 8 |
| | ← | 5 |
| | ← | 7 |
| | ← | 4 |
| | ← | 9 |
| | ← | 6 |
| | ← | 10 |
| | ← | 3 |
| | ← | 2 |

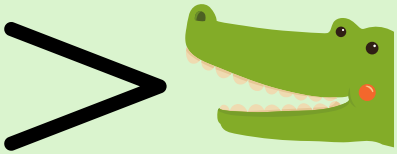


- Write in increments of 1.

| | | |
|---|---|---|
| 6 | → | 7 |
| 8 | → | |
| 7 | → | |
| 9 | → | |
| 5 | → | |
| 4 | → | |
| 2 | → | |
| 1 | → | |
| 3 | → | |

Name: _____

Class: _____

Greater Than, Less Than, Equal to

| > is greater than | = is equal to | < is less than |
|---|---|---|
|  |  |  |

$40 \bigcirc 45$

$34 \bigcirc 34$

$15 \bigcirc 23$

$28 \bigcirc 82$

$78 \bigcirc 12$

$24 \bigcirc 24$

$50 \bigcirc 50$

$84 \bigcirc 51$

$90 \bigcirc 98$

$12 \bigcirc 67$

Name: _____


Date: _____



Holds More & Less

Circle what is asked in each item.

Which container can hold more orange juice?




Which laundry basket can hold less clothes?



Which box can hold less toys?



Which watering can can hold more water?



Which bucket can hold more sand?



Which bowl can hold less porridge?



Name: _____

Greater Than Less Than

Write the symbol $<$ or $>$ base from the pictures.

